

Elastische Wellen in kubischen Medien

Lösung von Michael Wack

Elastische Energiedichte eines kubischen Kristalls

$$u = \frac{1}{2} c_{11} (\epsilon_{11}^2 + \epsilon_{22}^2 + \epsilon_{33}^2) + c_{12} (\epsilon_{11}\epsilon_{22} + \epsilon_{22}\epsilon_{33} + \epsilon_{33}\epsilon_{11}) + 2c_{44} (\epsilon_{12}\epsilon_{21} + \epsilon_{23}\epsilon_{32} + \epsilon_{31}\epsilon_{13})$$

a) Spannungs-Dehnungs-Beziehungen

$$\sigma_{ii} = \frac{\partial u}{\partial \epsilon_{ii}} = c_{11}\epsilon_{ii} + c_{12}(\epsilon_{jj} + \epsilon_{kk}) = c_{12}(\epsilon_{ii} + \epsilon_{jj} + \epsilon_{kk}) - c_{12}\epsilon_{ii} + c_{11}\epsilon_{ii} = c_{12}\epsilon_I + (c_{11} - c_{12})\epsilon_{ii}$$

$$\forall i \neq j \neq k$$

$$\sigma_{ij} = \frac{\partial u}{\partial \epsilon_{ij}} = 2c_{44}\epsilon_{ji} = 2c_{44}\epsilon_{ij} \quad \forall i \neq j$$

b) Umformung der Bewegungsgleichung

$$\text{Gleichgewichtsbedingung: } \frac{\partial \sigma_{ij}}{\partial x_i} - \rho \ddot{u}_j = 0 \quad \forall j = 1, 2, 3$$

$$j = 1 : \frac{\partial \sigma_{11}}{\partial x_1} + \frac{\partial \sigma_{21}}{\partial x_2} + \frac{\partial \sigma_{31}}{\partial x_3} - \rho \ddot{u}_1 = 0$$

$$c_{11} \frac{\partial \epsilon_{11}}{\partial x_1} + c_{12} \frac{\partial \epsilon_{22}}{\partial x_1} + c_{12} \frac{\partial \epsilon_{33}}{\partial x_1} + 2c_{44} \frac{\partial \epsilon_{21}}{\partial x_2} + 2c_{44} \frac{\partial \epsilon_{31}}{\partial x_3} - \rho \ddot{u}_1 = 0$$

$$\text{mit } \epsilon_{11} = \frac{\partial u_1}{\partial x_1}, \quad \epsilon_{22} = \frac{\partial u_2}{\partial x_2}, \quad \epsilon_{33} = \frac{\partial u_3}{\partial x_3}, \quad \epsilon_{21} = \frac{1}{2} \left(\frac{\partial u_2}{\partial x_1} + \frac{\partial u_1}{\partial x_2} \right), \quad \epsilon_{31} = \frac{1}{2} \left(\frac{\partial u_3}{\partial x_1} + \frac{\partial u_1}{\partial x_3} \right)$$

$$c_{11} \frac{\partial^2 u_1}{\partial x_1^2} + c_{12} \frac{\partial^2 u_2}{\partial x_1 \partial x_2} + c_{12} \frac{\partial^2 u_3}{\partial x_1 \partial x_3} + c_{44} \left(\frac{\partial^2 u_2}{\partial x_2 \partial x_1} + \frac{\partial^2 u_1}{\partial x_2^2} + \frac{\partial^2 u_3}{\partial x_3 \partial x_1} + \frac{\partial^2 u_1}{\partial x_3^2} \right) - \rho \ddot{u}_1 = 0$$

$$c_{44} \left(\Delta u_1 - \frac{\partial^2 u_1}{\partial x_1^2} + \frac{\partial^2 u_2}{\partial x_2 \partial x_1} + \frac{\partial^2 u_3}{\partial x_3 \partial x_1} \right) + c_{12} \left(\frac{\partial^2 u_2}{\partial x_1 \partial x_2} + \frac{\partial^2 u_3}{\partial x_1 \partial x_3} + \frac{\partial^2 u_1}{\partial x_1^2} - \frac{\partial^2 u_1}{\partial x_1^2} \right) + c_{11} \frac{\partial^2 u_1}{\partial x_1^2} - \rho \ddot{u}_1 = 0$$

$$c_{44} \Delta u_1 + (c_{12} + c_{44}) \frac{\partial}{\partial x_1} \text{div } \vec{u} + (c_{11} - c_{12} - 2c_{44}) \frac{\partial^2 u_1}{\partial x_1^2} - \rho \ddot{u}_1 = 0$$

$$j = 2, 3 \text{ analog } \Rightarrow c_{44} \Delta u_j + (c_{12} + c_{44}) \frac{\partial}{\partial x_j} \text{div } \vec{u} + (c_{11} - c_{12} - 2c_{44}) \frac{\partial^2 u_j}{\partial x_j^2} - \rho \ddot{u}_j = 0$$

c) Ebene Welle als Lösung

$$\vec{u} = \vec{e} \exp i (\vec{q} \cdot \vec{r} - \omega t)$$

Einsetzen von \vec{u} in die Bewegungsgleichung aus Aufgabe b) :

$$u_j = e_j \exp i (q_1 x_1 + q_2 x_2 + q_3 x_3 - \omega t)$$

$$\Delta u_j = \frac{\partial^2 u_j}{\partial x_1^2} + \frac{\partial^2 u_j}{\partial x_2^2} + \frac{\partial^2 u_j}{\partial x_3^2} = -u_j (q_1^2 + q_2^2 + q_3^2) = -u_j q^2$$

$$\frac{\partial}{\partial x_j} \operatorname{div} \vec{u} = \frac{\partial}{\partial x_j} \left(\frac{\partial u_1}{\partial x_1} + \frac{\partial u_2}{\partial x_2} + \frac{\partial u_3}{\partial x_3} \right) = \frac{\partial}{\partial x_j} i (u_1 q_1 + u_2 q_2 + u_3 q_3) = -q_j (\vec{u} \cdot \vec{q})$$

$$\frac{\partial^2 u_j}{\partial x_j^2} = -q_j^2 u_j$$

$$\ddot{u}_j = -\omega^2 u_j$$

$$-c_{44} u_j q^2 - (c_{12} + c_{44}) q_j (\vec{u} \cdot \vec{q}) - (c_{11} - c_{12} - 2c_{44}) u_j q_j^2 + \rho u_j \omega^2 = 0 \quad / \cdot \frac{-1}{\exp(\dots)}$$

$$c_{44} q^2 e_j + (c_{12} + c_{44}) q_j (\vec{q} \cdot \vec{e}) + (c_{11} - c_{12} - 2c_{44}) q_j^2 e_j + \rho \omega^2 e_j = 0 \quad \forall j = 1, 2, 3$$

d) mögliche Wellen in verschiedenen Ausbreitungsrichtungen

$$a = c_{44}$$

$$b = c_{12} + c_{44}$$

$$c = c_{11} - c_{12} - 2c_{44}$$

$$\begin{pmatrix} aq^2 + bq_1^2 + cq_1^2 - \rho\omega^2 & bq_1q_2 & bq_1q_3 \\ bq_2q_1 & aq^2 + bq_2^2 + cq_2^2 - \rho\omega^2 & bq_2q_3 \\ bq_3q_1 & bq_3q_2 & aq^2 + bq_3^2 + cq_3^2 - \rho\omega^2 \end{pmatrix}$$

$$\begin{pmatrix} q_1^2(a+b+c) + a(q_2^2 + q_3^2) - \rho\omega^2 & bq_1q_2 & bq_1q_3 \\ bq_2q_1 & q_2^2(a+b+c) + a(q_1^2 + q_3^2) - \rho\omega^2 & bq_2q_3 \\ bq_3q_1 & bq_3q_2 & q_3^2(a+b+c) + a(q_1^2 + q_2^2) - \rho\omega^2 \end{pmatrix}$$

$$a + b + c = c_{11}$$

$$\begin{pmatrix} c_{11}q_1^2 + c_{44}(q_2^2 + q_3^2) - \rho\omega^2 & (c_{12} + c_{44})q_1q_2 & (c_{12} + c_{44})q_1q_3 \\ (c_{12} + c_{44})q_2q_1 & c_{11}q_2^2 + c_{44}(q_1^2 + q_3^2) - \rho\omega^2 & (c_{12} + c_{44})q_2q_3 \\ (c_{12} + c_{44})q_3q_1 & (c_{12} + c_{44})q_3q_2 & c_{11}q_3^2 + c_{44}(q_1^2 + q_2^2) - \rho\omega^2 \end{pmatrix} =: (M)$$

$$\omega \text{ bestimmen aus : } |M| = 0$$

$$q \parallel [100] \Rightarrow q_1 \neq 0, q_2 = q_3 = 0$$

$$\begin{vmatrix} c_{11}q_1^2 - \rho\omega^2 & 0 & 0 \\ 0 & c_{44}q_1^2 - \rho\omega^2 & 0 \\ 0 & 0 & c_{44}q_1^2 - \rho\omega^2 \end{vmatrix} = (c_{11}q_1^2 - \rho\omega^2)(c_{44}q_1^2 - \rho\omega^2)^2 = 0$$

$$\Rightarrow \omega_1 = \sqrt{\frac{c_{11}}{\rho}} q_1, \omega_{2,3} = \sqrt{\frac{c_{44}}{\rho}} q_1$$

$$\text{Es muss gelten : } (M) \cdot \vec{e} = 0$$

$$\omega_1 \Rightarrow \vec{e}_1 = (1, 0, 0) \Rightarrow \text{longitudinale Welle}$$

$$\omega_2 \Rightarrow \vec{e}_2 = (0, 1, 0) \Rightarrow \text{transversale Welle}$$

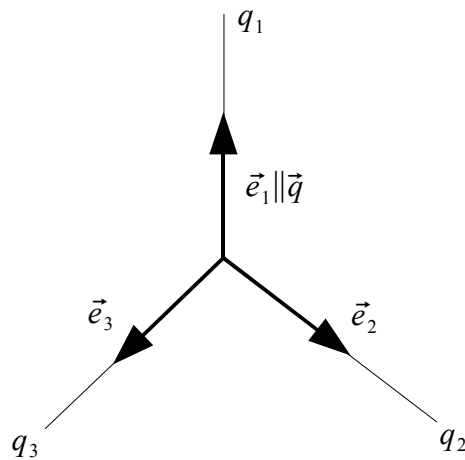
$$\omega_3 \Rightarrow \vec{e}_3 = (0, 0, 1) \Rightarrow \text{transversale Welle}$$

Phasengeschwindigkeiten :

$$v = \frac{\omega}{|\vec{q}|}$$

$$v_1 = \frac{\omega_1}{q_1} = \sqrt{\frac{c_{11}}{\rho}}, \text{ Al : } \sqrt{\frac{1,143 \cdot 10^{11} \text{kg/m/s}^2}{2698 \text{kg/m}^3}} = 6,51 \text{km/s}, \text{ Si : } \sqrt{\frac{1,66 \cdot 10^{11} \text{kg/m/s}^2}{2326,3 \text{kg/m}^3}} = 8,45 \text{km/s}$$

$$v_{2,3} = \frac{\omega_{2,3}}{q_1} = \sqrt{\frac{c_{44}}{\rho}}, \text{ Al : } \sqrt{\frac{0,316 \cdot 10^{11} \text{kg/m/s}^2}{2698 \text{kg/m}^3}} = 3,69 \text{km/s}, \text{ Si : } \sqrt{\frac{0,796 \cdot 10^{11} \text{kg/m/s}^2}{2326,3 \text{kg/m}^3}} = 5,85 \text{km/s}$$



$$q \parallel [110] \Rightarrow q_1 = q_2 \neq 0, q_3 = 0$$

$$\begin{vmatrix} (c_{11} + c_{44})q_1^2 - \rho\omega^2 & (c_{12} + c_{44})q_1^2 & 0 \\ (c_{12} + c_{44})q_1^2 & (c_{11} + c_{44})q_1^2 - \rho\omega^2 & 0 \\ 0 & 0 & 2c_{44}q_1^2 - \rho\omega^2 \end{vmatrix} = 0$$

$$\Rightarrow \omega_1 = \sqrt{\frac{2c_{44}}{\rho}}q_1, \omega_2 = \sqrt{\frac{c_{11} - c_{12}}{\rho}}q_1, \omega_3 = \sqrt{\frac{2c_{44} + c_{11} + c_{12}}{\rho}}q_1$$

Es muss gelten : $(M) \cdot \vec{e} = 0$

$$\omega_1 \Rightarrow \vec{e}_1 = (0, 0, 1) \Rightarrow \text{transversale Welle}$$

$$\omega_2 \Rightarrow \vec{e}_2 = \frac{1}{\sqrt{2}}(-1, 1, 0) \Rightarrow \text{transversale Welle}$$

$$\omega_3 \Rightarrow \vec{e}_3 = \frac{1}{\sqrt{2}}(1, 1, 0) \Rightarrow \text{longitudinale Welle}$$

Phasengeschwindigkeiten :

$$v_1 = \frac{\omega_1}{\sqrt{2} \cdot q_1} = \sqrt{\frac{c_{44}}{\rho}},$$

$$\text{Al} : \sqrt{\frac{0,316 \cdot 10^{11} \text{kg/m/s}^2}{2698 \text{kg/m}^3}} = 3,42 \text{km/s}, \quad \text{Si} : \sqrt{\frac{0,796 \cdot 10^{11} \text{kg/m/s}^2}{2326,3 \text{kg/m}^3}} = 5,85 \text{km/s}$$

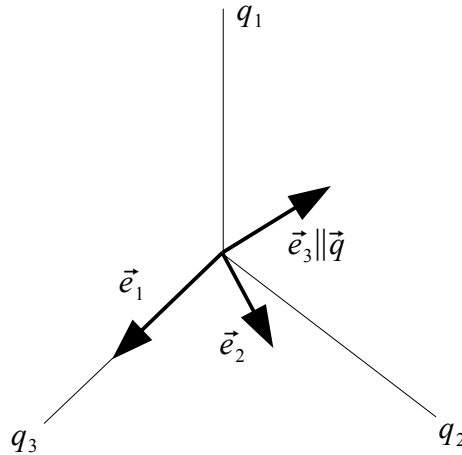
$$v_2 = \frac{\omega_2}{\sqrt{2} \cdot q_1} = \sqrt{\frac{c_{11} - c_{12}}{2 \cdot \rho}},$$

$$\text{Al} : \sqrt{\frac{(1,143 - 0,619) \cdot 10^{11} \text{kg/m/s}^2}{2 \cdot 2698 \text{kg/m}^3}} = 3,12 \text{km/s}, \quad \text{Si} : \sqrt{\frac{(1,66 - 0,639) \cdot 10^{11} \text{kg/m/s}^2}{2 \cdot 2326,3 \text{kg/m}^3}} = 4,68 \text{km/s}$$

$$v_3 = \frac{\omega_3}{\sqrt{2} \cdot q_1} = \sqrt{\frac{2c_{44} + c_{11} + c_{12}}{2 \cdot \rho}},$$

$$\text{Al} : \sqrt{\frac{(2 \cdot 0,316 + 1,143 + 0,619) \cdot 10^{11} \text{kg/m/s}^2}{2 \cdot 2698 \text{kg/m}^3}} = 6,66 \text{km/s}$$

$$\text{Si} : \sqrt{\frac{(2 \cdot 0,796 + 1,66 + 0,639) \cdot 10^{11} \text{kg/m/s}^2}{2 \cdot 2326,3 \text{kg/m}^3}} = 9,14 \text{km/s}$$



$$q \parallel [111] \Rightarrow q_1 = q_2 = q_3 \neq 0$$

$$\begin{vmatrix} (2c_{44} + c_{11})q_1^2 - \rho\omega^2 & (c_{12} + c_{44})q_1^2 & (c_{12} + c_{44})q_1^2 \\ (c_{12} + c_{44})q_1^2 & (2c_{44} + c_{11})q_1^2 - \rho\omega^2 & (c_{12} + c_{44})q_1^2 \\ (c_{12} + c_{44})q_1^2 & (c_{12} + c_{44})q_1^2 & (2c_{44} + c_{11})q_1^2 - \rho\omega^2 \end{vmatrix} = 0$$

$$\Rightarrow \omega_1 = \sqrt{\frac{4c_{44} + c_{11} + 2c_{12}}{\rho}} q_1, \quad \omega_{2,3} = \sqrt{\frac{c_{44} - c_{12} + c_{11}}{\rho}} q_1$$

Es muss gelten : $(M) \cdot \vec{e} = 0$

$$\omega_1 \Rightarrow \vec{e}_1 = \frac{1}{\sqrt{3}}(1, 1, 1) \Rightarrow \text{longitudinale Welle}$$

$$\omega_2 \Rightarrow \vec{e}_2 = \frac{1}{\sqrt{2}}(-1, 0, 1) \Rightarrow \text{transversale Welle}$$

$$\omega_3 \Rightarrow \vec{e}_3 = \frac{1}{\sqrt{2}}(-1, 1, 0) \Rightarrow \text{transversale Welle}$$

Phasengeschwindigkeiten :

$$v_1 = \frac{\omega_1}{\sqrt{3} \cdot q_1} = \sqrt{\frac{4c_{44} + c_{11} + 2c_{12}}{3 \cdot \rho}},$$

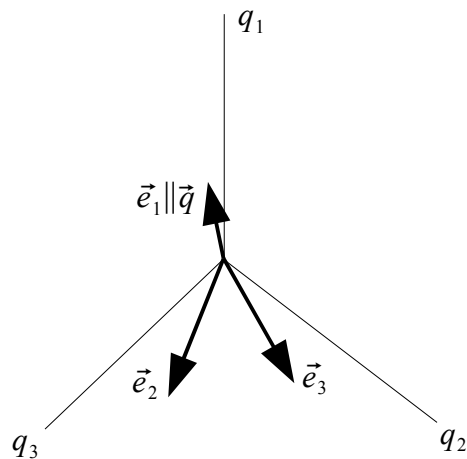
$$\text{Al : } \sqrt{\frac{(4 \cdot 0,316 + 1,143 + 2 \cdot 0,619) \cdot 10^{11} \text{kg/m/s}^2}{3 \cdot 2698 \text{kg/m}^3}} = 6,71 \text{km/s}$$

$$\text{Si : } \sqrt{\frac{(4 \cdot 0,796 + 1,66 + 2 \cdot 0,639) \cdot 10^{11} \text{kg/m/s}^2}{3 \cdot 2326,3 \text{kg/m}^3}} = 9,37 \text{km/s}$$

$$v_{2,3} = \frac{\omega_{2,3}}{\sqrt{3} \cdot q_1} = \sqrt{\frac{c_{44} - c_{12} + c_{11}}{3 \cdot \rho}},$$

$$\text{Al : } \sqrt{\frac{(0,316 - 0,619 + 1,143) \cdot 10^{11} \text{kg/m/s}^2}{3 \cdot 2698 \text{kg/m}^3}} = 3,22 \text{km/s}$$

$$\text{Si : } \sqrt{\frac{(0,796 - 0,639 + 1,66) \cdot 10^{11} \text{kg/m/s}^2}{3 \cdot 2326,3 \text{kg/m}^3}} = 5,10 \text{km/s}$$



Man sieht, dass sich die longitudinalen Wellen schneller als die transversalen ausbreiten.